



NAME _____


DATE _____

NUMBER BOND

Draw a picture and write a number sentence to match the story.

Example:


Ben has 2 red balls and gets 6 green balls. How many does he have now?



$$\boxed{2} + \boxed{6} = \boxed{8}$$

Ben has 8 balls.

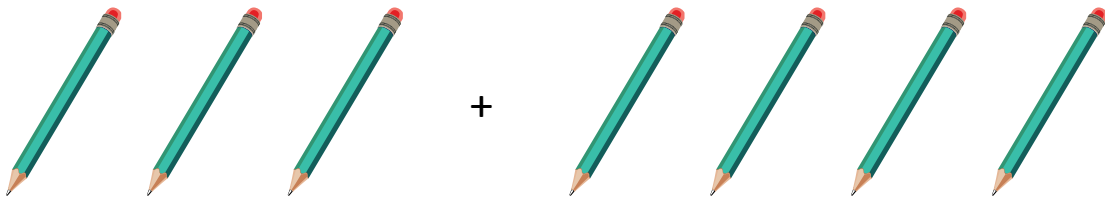
1) Alford has 7 chocolates and gets 2 chocolates. How many does he have now?



$$\boxed{} + \boxed{} = \boxed{}$$

Alford has ____ chocolates.

2) Tom has 3 pencils and gets 4 pencils. How many does he have now?



$$\boxed{} + \boxed{} = \boxed{}$$

Tom has ____ pencils.

3) Mother has 6 dollars and gets 2 dollars. How many does she have now?



$$\boxed{} + \boxed{} = \boxed{}$$

Mother has ____ dollars.